

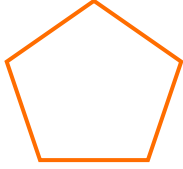


NAME _____ DATE _____

IDENTIFY SIDES AND CORNERS

Write the number of corners and sides that each shape has, and match the shape to its name.

1)



___ corners.

___ straight lines.

Triangle

2)




___ corners.

___ straight lines.

Pentagon

3)




___ corners.

___ straight lines.

Circle

4)



___ corners.

___ straight lines.

Parallelogram